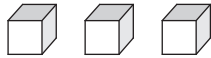


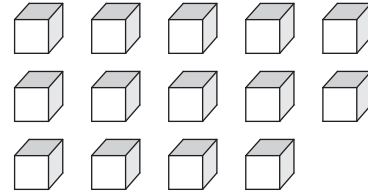
Base Ten Blocks

Write the number formed by each set of base ten blocks.

1)



2)



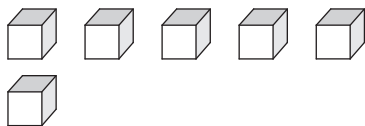
Preview

Become a member to unlock
unrestricted access to both printable
and online worksheets.



www.tutoringhour.com

7)



8)

