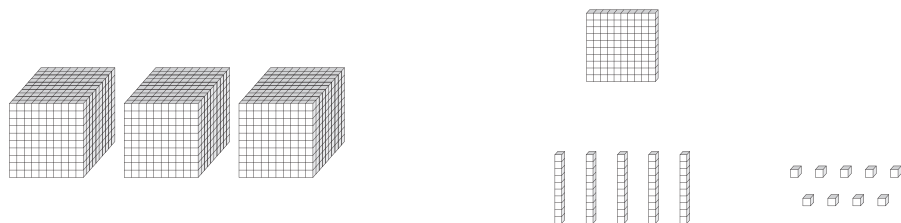


# Base Ten Blocks

Write the number formed by each set of base ten blocks.

1)



\_\_\_\_\_

2)

# Preview


Become a member to unlock  
unrestricted access to both printable  
and online worksheets.



[www.tutoringhour.com](http://www.tutoringhour.com)

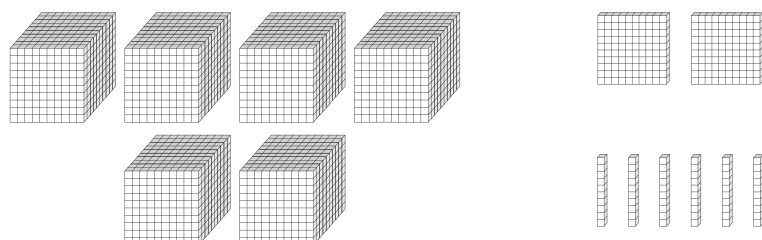
3)

4)



\_\_\_\_\_

5)



\_\_\_\_\_