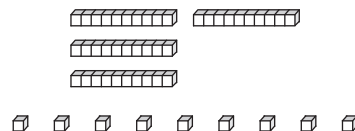
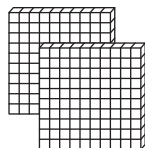


# Base Ten Blocks

Write the number formed by each set of base ten blocks.

1)



\_\_\_\_\_

2)



3)

# Preview

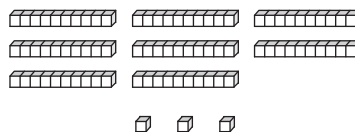
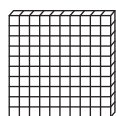
Become a member to unlock  
unrestricted access to both printable  
and online worksheets.



[www.tutoringhour.com](http://www.tutoringhour.com)

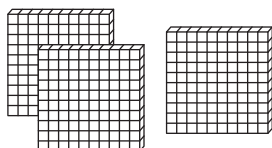
4)

5)



\_\_\_\_\_

6)



\_\_\_\_\_