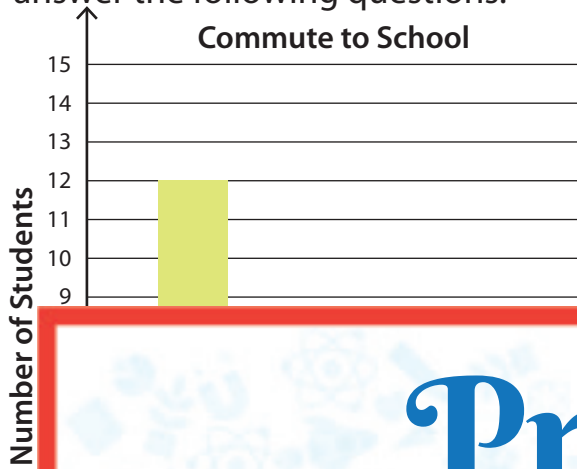





Reading and Interpreting Bar Graphs

- 1) Mr. Fredrickson surveyed the students in his class to find out how they get to school every day, and recorded their response in the form of a bar graph. Read the data and answer the following questions.



Modes of Transport			

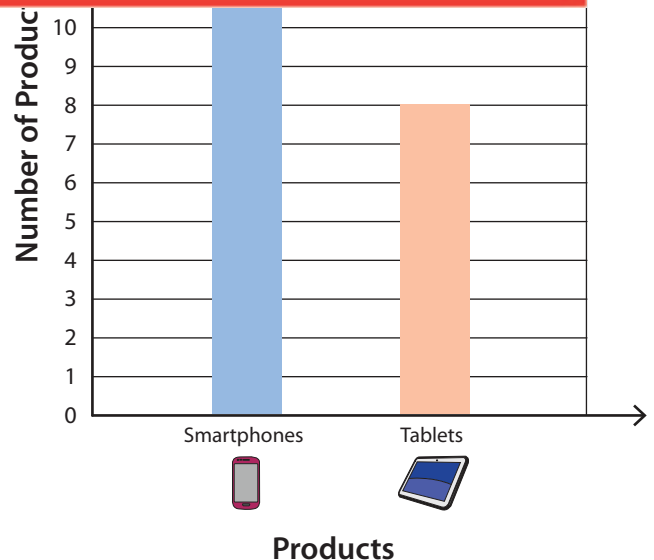
Preview

Become a member to unlock unrestricted access to both printable and online worksheets.





www.tutoringhour.com

- 2) The number of products sold in the month of May is _____.
- 1) _____



- 2) How many  were sold?

- 3) How many more  than  were sold?