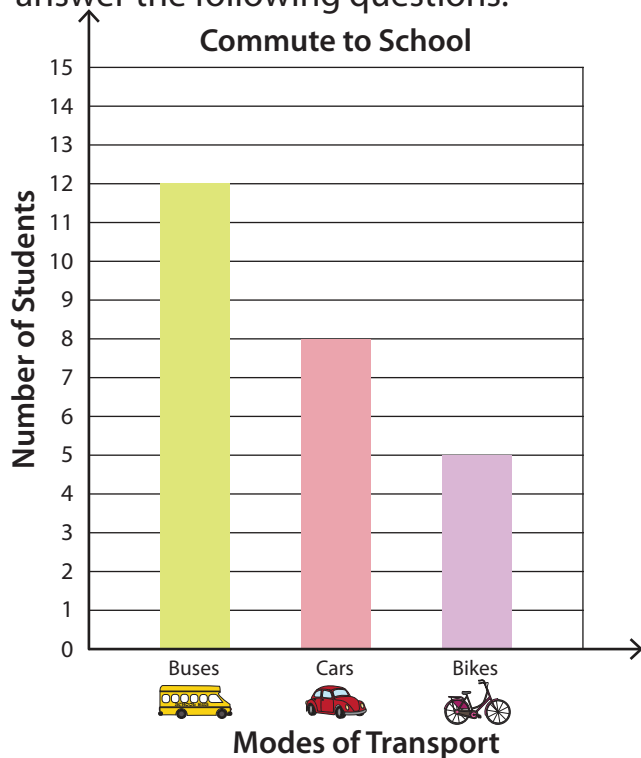





# Reading and Interpreting Bar Graphs

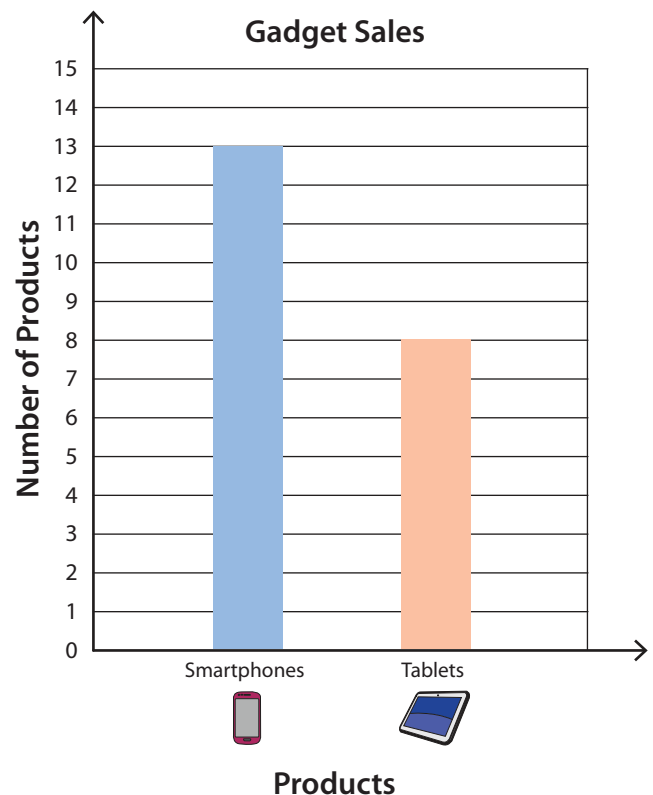
Answer Key

- 1) Mr. Fredrickson surveyed the students in his class to find out how they get to school every day, and recorded their response in the form of a bar graph. Read the data and answer the following questions.



Modes of Transport			
Number of Students	<b>12</b>	<b>8</b>	<b>5</b>

- 2) The bar graph illustrates how many smartphones and tablets were sold at a store in a day. Read the graph and answer the questions.





- 1) How many  were sold?

**13**

- 2) How many  were sold?

**8**

- 3) How many more  than  were sold?

**5**