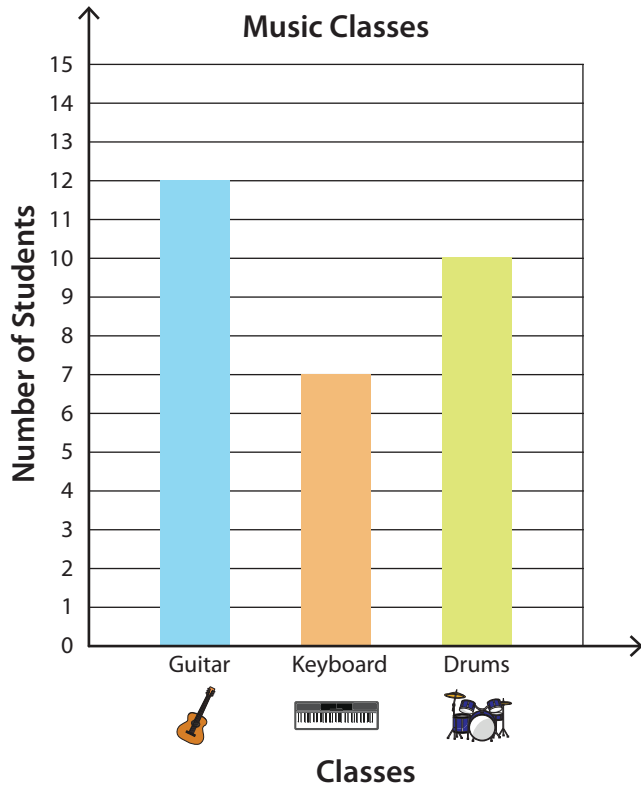





Reading and Interpreting Bar Graphs


Answer Key

- 1) The bar graph represents the number of students enrolled in various classes at a school of music. Read the graph and answer the questions.



Classes			
Number of Students	12	7	10

- 2) The bar graph below has data about animals at the AAL animal shelter. Read the data and answer the questions.

- 1) How many  are housed in the shelter?

9

- 2) How many more  than  are at the shelter?

3

- 3) How many  and  are housed in the shelter altogether?

15

