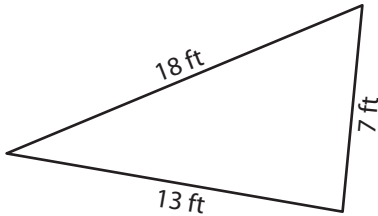


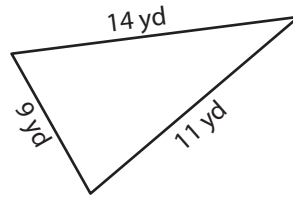
## Area of Scalene Triangles | Integers

Find the area of each scalene triangle. Round your answer to two decimal places.

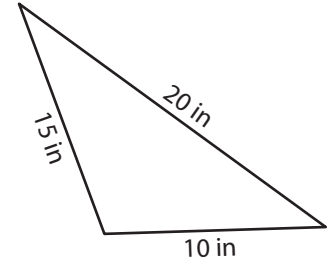
1)



2)



3)



4)

# Preview

5)

Become a member to unlock  
unrestricted access to both printable  
and online worksheets.

6)

www.tutoringhour.com



sides

- 7) Claudia designed a triangle-shaped banner for her brother's birthday. If the lengths of the sides of the banner were 3 yards, 5 yards, and 6 yards, what was the area?