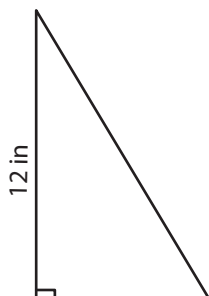


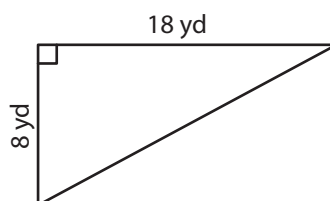
Area of Right Triangles | Integers

Find the area of each right triangle.

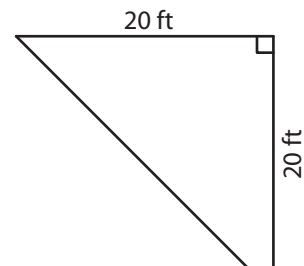
1)



2)



3)



4)

7)

Preview

Become a member to unlock
unrestricted access to both printable
and online worksheets.

www.tutoringhour.com



triangle, and the sides forming the right triangle measure 12 yards and 16 yards.
What area will Jamie plant tomatoes in?

8) Frank designed a model sailboat and attached a piece of fabric to the mast. The two shorter sides of the fabric formed a right triangle and measured 5 inches and 12 inches.
How much fabric did Frank use?
