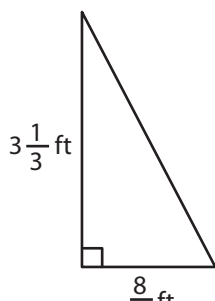


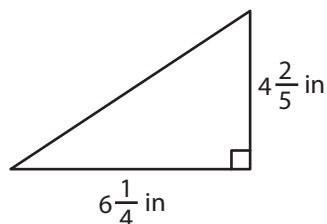
# Area of Right Triangles | Fractions

Find the area of each right triangle.

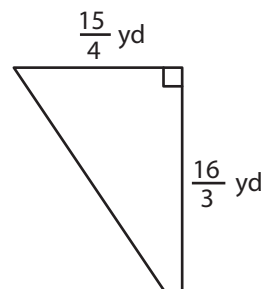
1)



2)



3)



4)

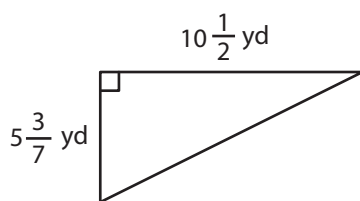
# Preview

Become a member to unlock  
unrestricted access to both printable  
and online worksheets.

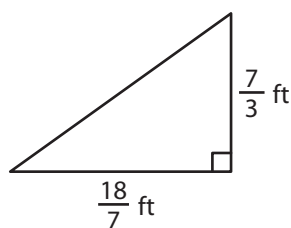


[www.tutoringhour.com](http://www.tutoringhour.com)

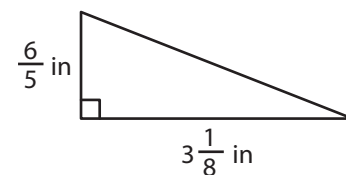
7)



8)



9)



Area = \_\_\_\_\_

Area = \_\_\_\_\_

Area = \_\_\_\_\_