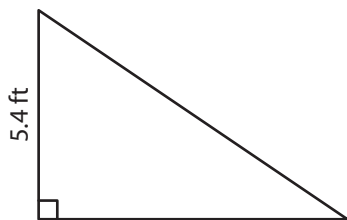


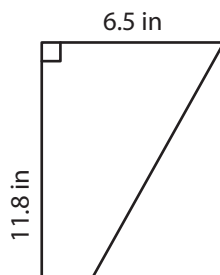
Area of Right Triangles | Decimals

Find the area of each right triangle. Round your answer to two decimal places.

1)



2)



3)



4)

Preview

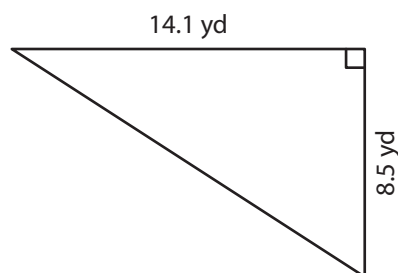
Become a member to unlock
unrestricted access to both printable
and online worksheets.



www.tutoringhour.com

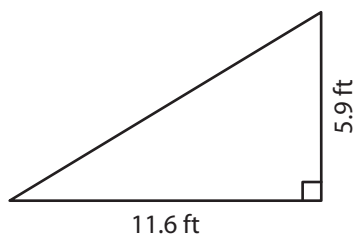
9.3 ft

7)



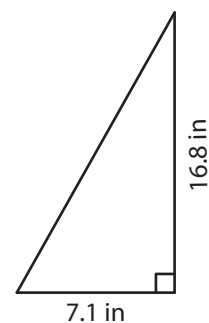
Area = _____

8)



Area = _____

9)



Area = _____