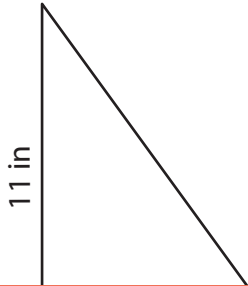


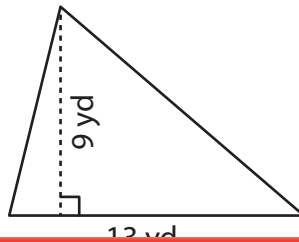
Area of Triangles | Integers

Find the area of each triangle.

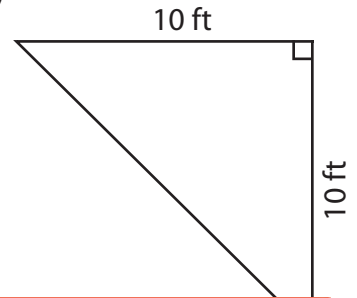
1)



2)



3)



4)

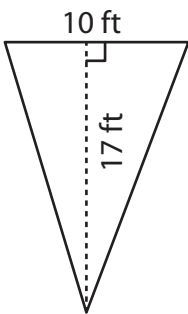
Preview

Become a member to unlock
unrestricted access to both printable
and online worksheets.



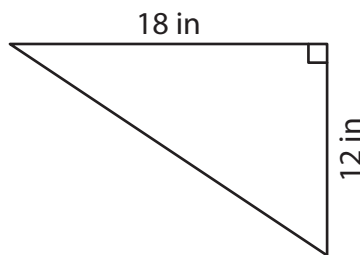
www.tutoringhour.com

7)



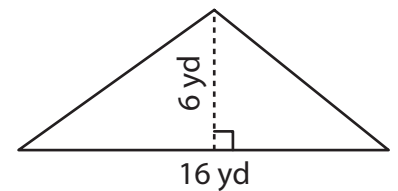
Area = _____

8)



Area = _____

9)



Area = _____