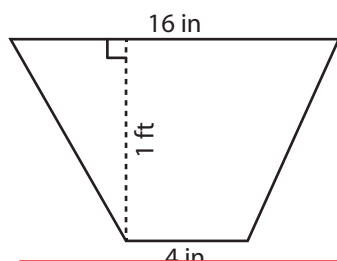


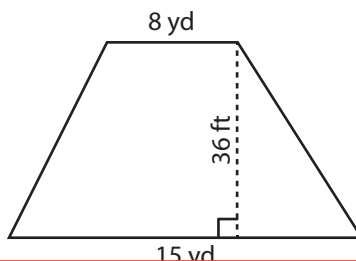
Area of a Trapezoid

Find the area of each trapezoid.

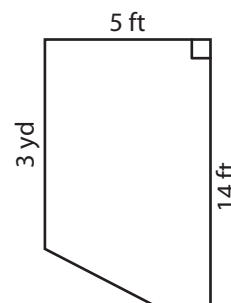
1)



2)



3)



4)

Ar

Preview

ft²

Become a member to unlock
unrestricted access to both printable
and online worksheets.

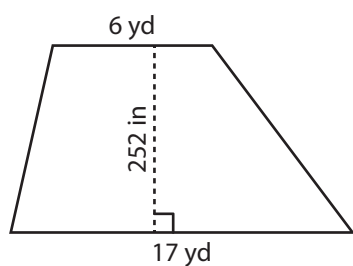
Ar

yd²

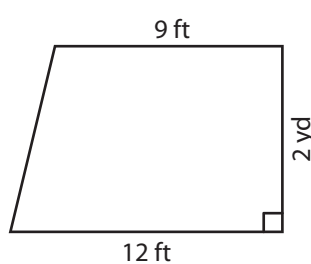
www.tutoringhour.com



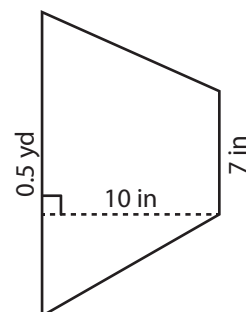
7)



8)



9)



Area = _____ yd²

Area = _____ ft²

Area = _____ in²