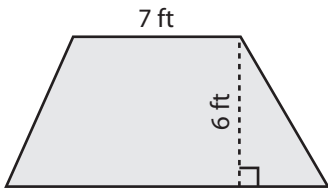


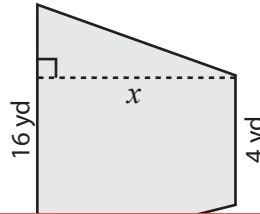
Trapezoid | Missing Dimension

Find x .

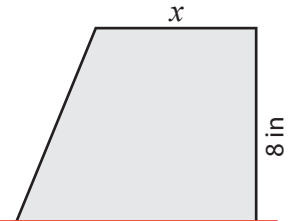
1) Area = 57 ft^2



2) Area = 80 yd^2



3) Area = 72 in^2



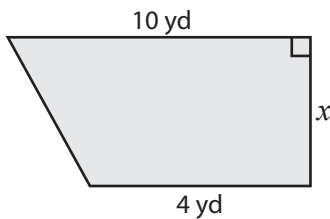
Preview

Become a member to unlock
unrestricted access to both printable
and online worksheets.



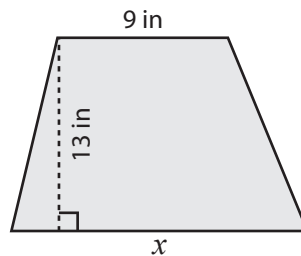
www.tutoringhour.com

7) Area = 21 yd^2



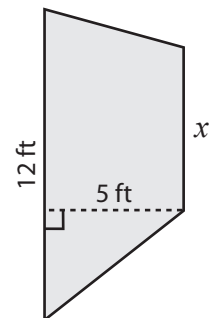
$x =$ _____

8) Area = 169 in^2



$x =$ _____

9) Area = 45 ft^2



$x =$ _____