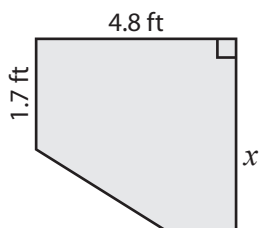


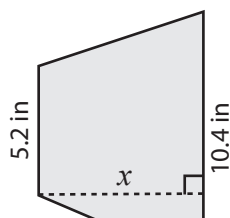
Trapezoid | Missing Dimension

Find x .

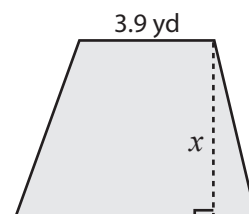
1) Area = 23.04 ft^2



2) Area = 53.82 in^2



3) Area = 78.49 yd^2



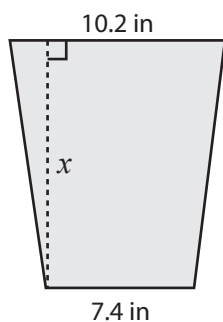
Preview

Become a member to unlock
unrestricted access to both printable
and online worksheets.



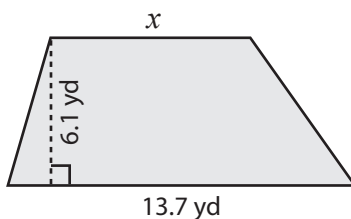
www.tutoringhour.com

7) Area = 154 in^2



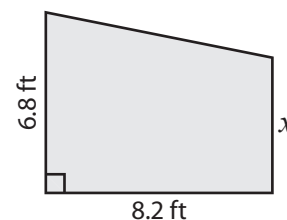
$x =$ _____

8) Area = 67.71 yd^2



$x =$ _____

9) Area = 45.1 ft^2



$x =$ _____