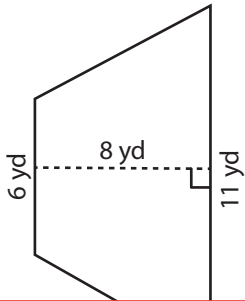


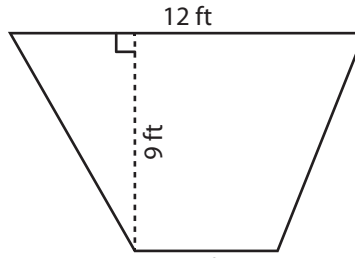
# Area of a Trapezoid

Find the area of each trapezoid.

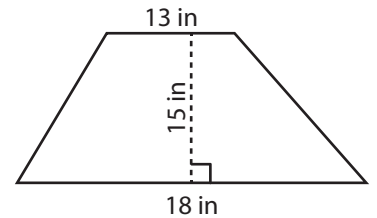
1)



2)



3)



Ar

# Preview

4)

Become a member to unlock  
unrestricted access to both printable  
and online worksheets.

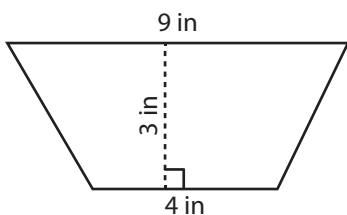


[www.tutoringhour.com](http://www.tutoringhour.com)

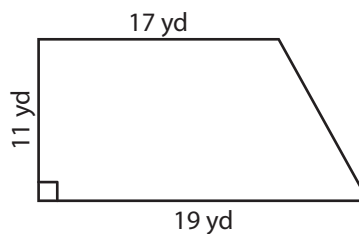
Ar

4 yd

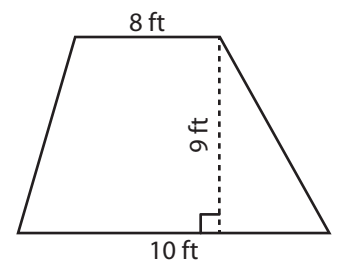
7)



8)



9)



Area = \_\_\_\_\_

Area = \_\_\_\_\_

Area = \_\_\_\_\_