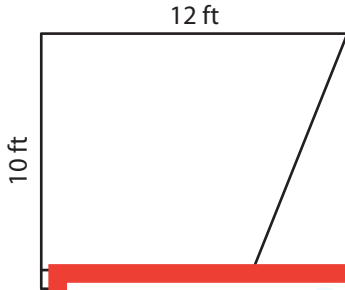


# Area of a Trapezoid

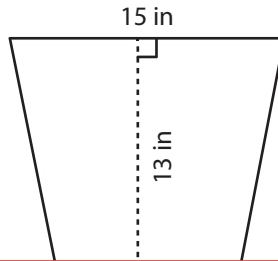
Find the area of each trapezoid.

1)

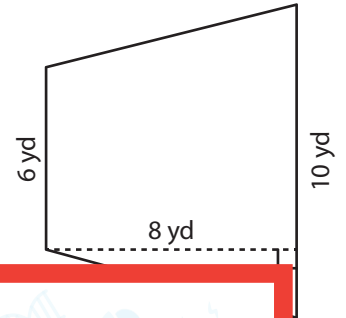


Ar

2)



3)



4)

Ar

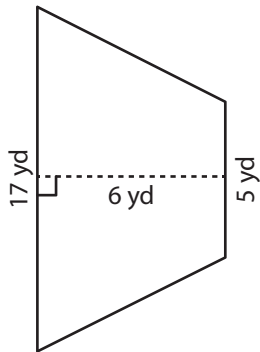
# Preview

Become a member to unlock  
unrestricted access to both printable  
and online worksheets.



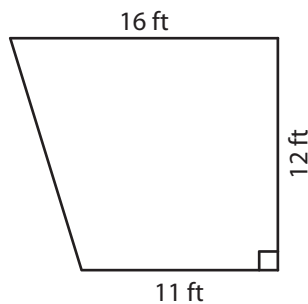
www.tutoringhour.com

7)



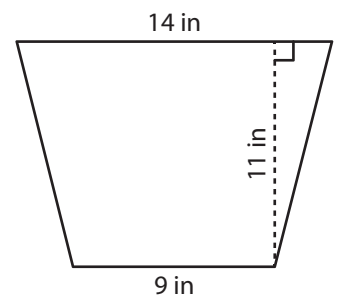
Area = \_\_\_\_\_

8)



Area = \_\_\_\_\_

9)



Area = \_\_\_\_\_