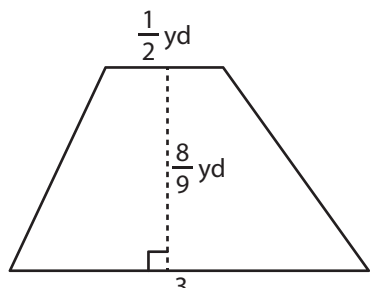


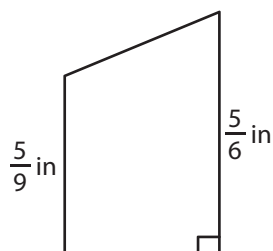
Area of a Trapezoid

Find the area of each trapezoid.

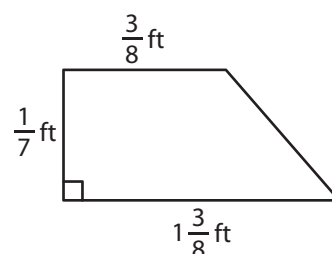
1)



2)



3)



Ar

Preview

4)

 $1\frac{2}{3}$ in

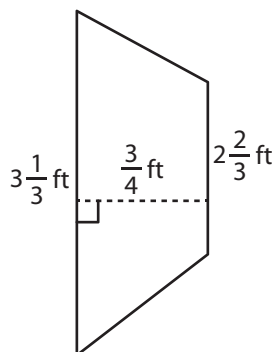
Ar

Become a member to unlock
unrestricted access to both printable
and online worksheets.



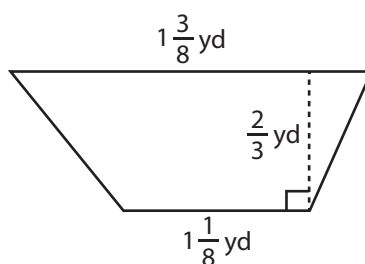
www.tutoringhour.com

7)



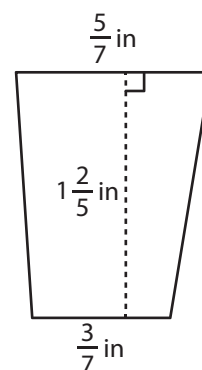
Area = _____

8)



Area = _____

9)



Area = _____