


Area and Perimeter of a Square

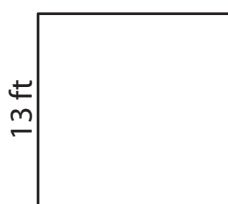
Find the area and perimeter of each square.

1)




18 yd

2)



13 ft

3)



26 in

Perim

4)

Preview

Become a member to unlock
unrestricted access to both printable
and online worksheets.



Perim

www.tutoringhour.com

7)




2 in

8)



20 yd

9)



23 ft

Area = _____

Area = _____

Area = _____

Perimeter = _____

Perimeter = _____

Perimeter = _____