

# Area and Perimeter of a Square

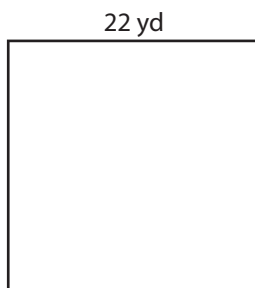
Find the area and perimeter of each square.

1)




15 in

2)



22 yd

3)



10 ft


Perim

4)

27 yd

Perim

7)




11 ft

8)



6 in

9)



25 yd

Area = \_\_\_\_\_

Area = \_\_\_\_\_

Area = \_\_\_\_\_

Perimeter = \_\_\_\_\_

Perimeter = \_\_\_\_\_

Perimeter = \_\_\_\_\_

## Preview

Become a member to unlock  
unrestricted access to both printable  
and online worksheets.



[www.tutoringhour.com](http://www.tutoringhour.com)