


Area and Perimeter of a Square

Find the area and perimeter of each square.

1) $\frac{3}{4}$ ft




Area = _____

Perimeter = _____

2)

$\frac{9}{2}$ in



Area = _____

Perimeter = _____

3)


$\frac{2}{5}$ yd



Area = _____

Perimeter = _____

4)



Area = _____

Perimeter = _____

5)

$\frac{1}{8}$ yd




Area = _____

Perimeter = _____

6)

$1\frac{1}{3}$ ft



Area = _____

Perimeter = _____

7)

$2\frac{1}{2}$ yd




Area = _____

Perimeter = _____

8)

$\frac{4}{9}$ ft




Area = _____

Perimeter = _____

9)

$\frac{6}{7}$ in



Area = _____

Perimeter = _____