



# Area and Perimeter of a Square

Find the area and perimeter of each square.

1)  $\frac{1}{6}$  yd



2)



3)



$\frac{1}{2}$  in


Perim

4)

## Preview

Become a member to unlock  
unrestricted access to both printable  
and online worksheets.

www.tutoringhour.com



Perim


7)



$\frac{1}{9}$  in


8)

$\frac{5}{4}$  yd



9)

$2\frac{1}{3}$  ft



Area = \_\_\_\_\_

Area = \_\_\_\_\_

Area = \_\_\_\_\_

Perimeter = \_\_\_\_\_

Perimeter = \_\_\_\_\_

Perimeter = \_\_\_\_\_