



Area and Perimeter of a Square

Find the area and perimeter of each square.


1)

 $\frac{3}{2}$ in

2)

 $\frac{1}{5}$ yd

3)

 $\frac{2}{3}$ ft


Perim

4)



Perim


7)

 $\frac{7}{9}$ in

Area = _____

Perimeter = _____


8)

 $3\frac{1}{2}$ ft

Area = _____

Perimeter = _____

9)

 $\frac{1}{4}$ yd

Area = _____

Perimeter = _____

Preview

Become a member to unlock
unrestricted access to both printable
and online worksheets.



www.tutoringhour.com