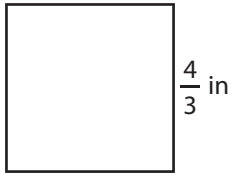


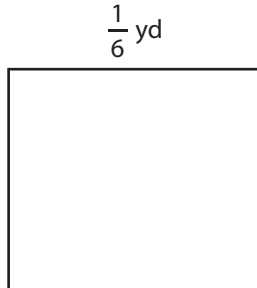
# Area of a Square

Find the area of each square.

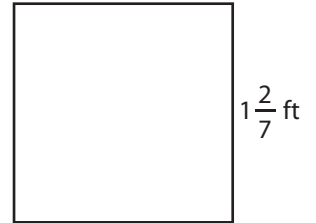
1)



2)



3)



4)

$1\frac{1}{8}$

Area

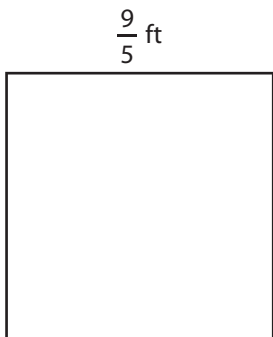
# Preview

Become a member to unlock  
unrestricted access to both printable  
and online worksheets.




www.tutoringhour.com

7)



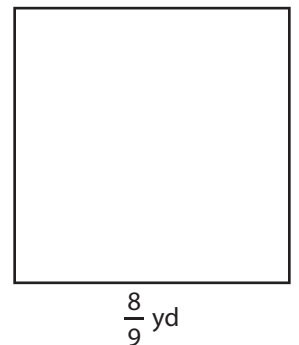
Area = \_\_\_\_\_

8)



Area = \_\_\_\_\_

9)



Area = \_\_\_\_\_