



Area and Perimeter of a Square

Find the area and perimeter of each square.

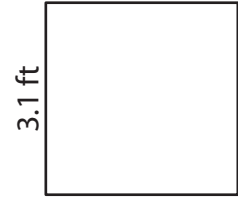
1)



2)



3)



Perim

4)

Preview


Become a member to unlock
unrestricted access to both printable
and online worksheets.

12.9 yd

Perim

www.tutoringhour.com


7)



10.2 ft

Area = _____

8)




2.5 yd

Area = _____

Perimeter = _____

9)



5.4 in

Area = _____

Perimeter = _____

Perimeter = _____