


Area and Perimeter of a Square


Find the area and perimeter of each square.

1)



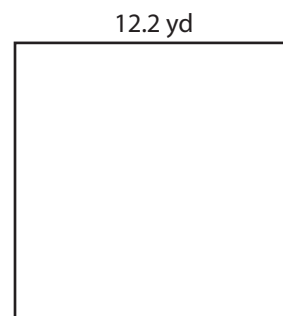
2.6 in

2)



8.4 ft

3)



12.2 yd

Perim

Preview

4)

Become a member to unlock
unrestricted access to both printable
and online worksheets.



Perim


www.tutoringhour.com

7)




7.1 yd

8)



10.7 in

9)



4.9 ft

Area = _____

Area = _____

Area = _____

Perimeter = _____

Perimeter = _____

Perimeter = _____