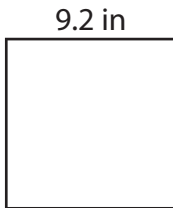


Area of a Square

Find the area of each square.

1)



2)



3)



Area = _____

Preview

4)

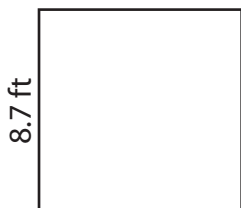
Become a member to unlock
unrestricted access to both printable
and online worksheets.



www.tutoringhour.com

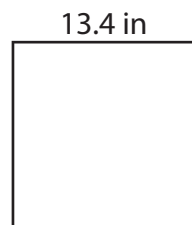
Area = _____

7)




Area = _____

8)



Area = _____

9)



Area = _____