

# Area of a Square

---

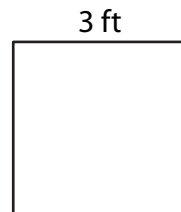
Find the area of each square.

1)




Area = \_\_\_\_\_

2)



Area = \_\_\_\_\_

3)



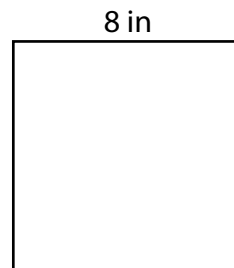
Area = \_\_\_\_\_

4)



Area = \_\_\_\_\_

5) Selena knits a scarf in the shape of a square. If each side measures 8 inches, what is the area of the scarf?



\_\_\_\_\_

6) David wants to paint a square wall with each side measuring 7 feet. What is the area of the wall?



\_\_\_\_\_