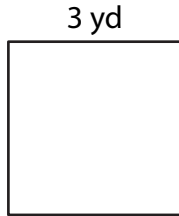


# Area of a Square

---

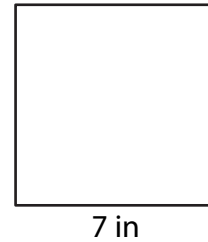
Find the area of each square.

1)



Area = \_\_\_\_\_

2)



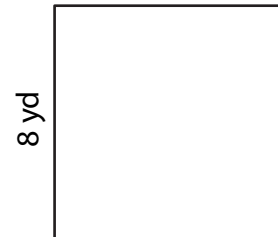
Area = \_\_\_\_\_

3)



Area = \_\_\_\_\_


4)



Area = \_\_\_\_\_

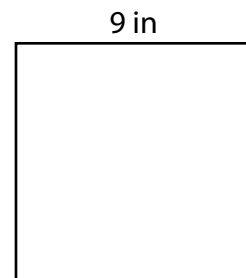
---

5) Tony is laying tiles in a square bathroom with each side measuring 5 feet. What is the total area of the floor that needs tiling?



\_\_\_\_\_

6) Julia is making a quilt with square patches, where each side measures 9 inches. What is the area of each patch?



\_\_\_\_\_