


Area of a Square


Find the area of each square.

1)



7 ft

2)



5 yd

3)

Preview

Become a member to unlock
unrestricted access to both printable
and online worksheets.




www.tutoringhour.com

5) M
ar

ne

6) John is cutting a piece of fabric in the shape of a square. If each side measures 2 yards, what is the area of the fabric?



2 yd