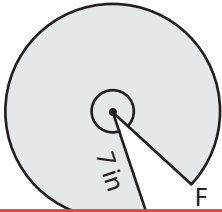


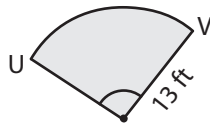
Finding Area of the Sector from Arc Length

Find the area of each sector. Round your answer to two decimal places.
(Use 3.14 for π .)

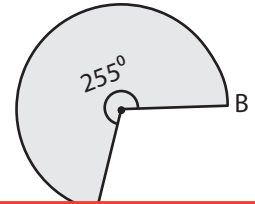
1)



2)



3)



Length

4)

Preview

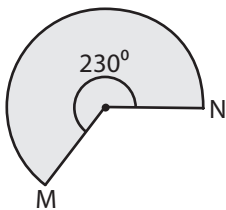
Become a member to unlock
unrestricted access to both printable
and online worksheets.



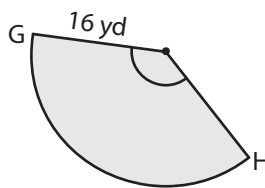
www.tutoringhour.com

Length

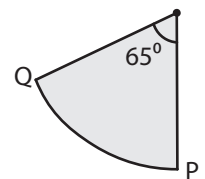
7)



8)



9)



Length of the arc MN = 50.02 ft

Length of the arc GH = 37.68 yd

Length of the arc PQ = 20.41 in
