

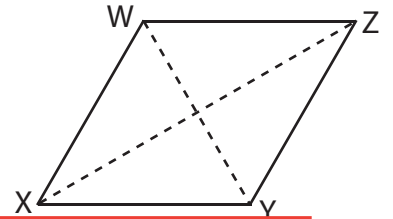
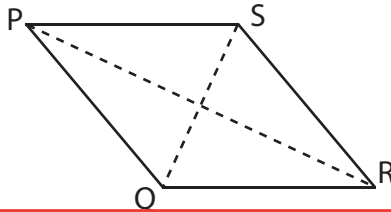
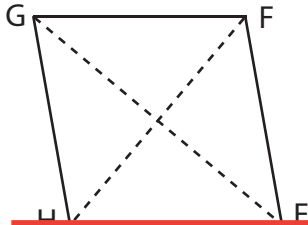
Area of a Rhombus

Find the area of each rhombus.

1) $GE = 32$ in, $HF = 26$ in

2) $QS = 29$ ft, $PR = 45$ ft

3) $WY = 13$ yd, $XZ = 24$ yd



Preview

Become a member to unlock
unrestricted access to both printable
and online worksheets.

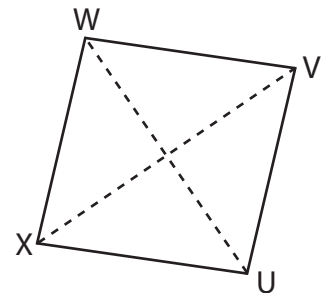
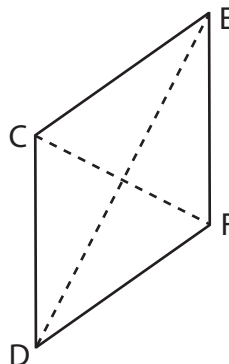
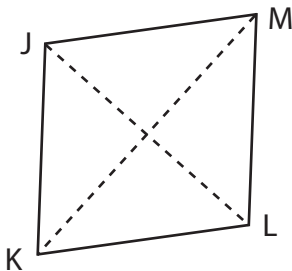


www.tutoringhour.com

7) $JL = 28$ ft, $KM = 39$ ft

8) $CF = 11$ yd, $DE = 44$ yd

9) $WU = 30$ in, $XV = 34$ in



Area = _____

Area = _____

Area = _____