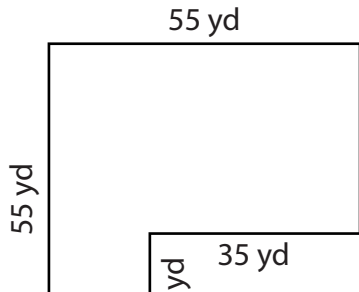


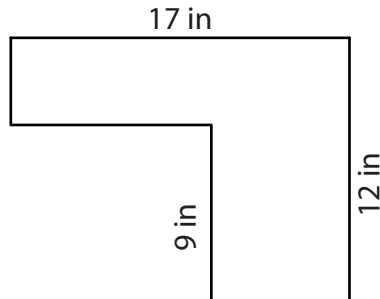
Area of Rectilinear Figures

Find the area of each figure.

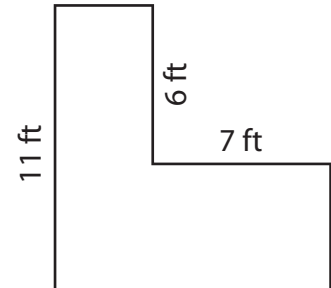
1)



2)



3)



A

Preview

4)

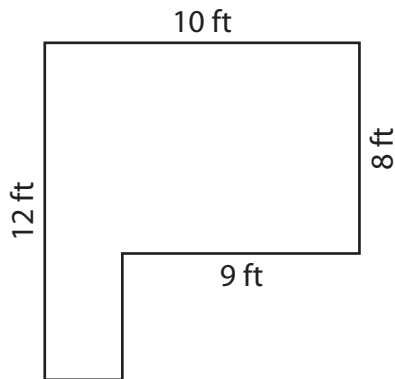
Become a member to unlock
unrestricted access to both printable
and online worksheets.



A

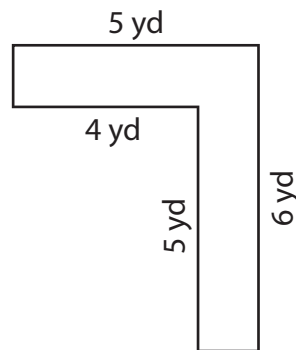
www.tutoringhour.com

7)



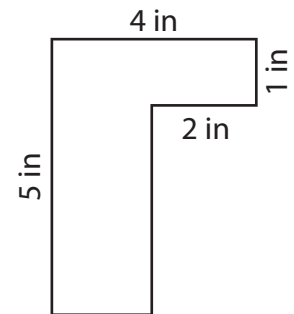
Area = _____

8)



Area = _____

9)



Area = _____