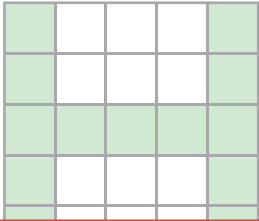


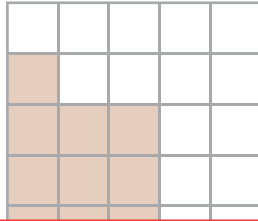
Area of Rectilinear Figures

Find the area of the shaded region in each grid.


1) Scale: $\square = 6 \text{ in}^2$



2) Scale: $\square = 3 \text{ ft}^2$



3) Scale: $\square = 5 \text{ yd}^2$



Area = _____

Preview

4)

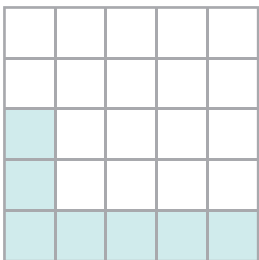
Become a member to unlock
unrestricted access to both printable
and online worksheets.

Area = _____

www.tutoringhour.com

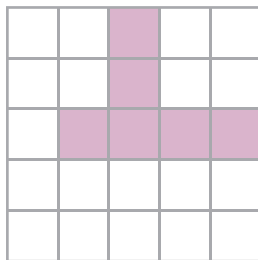


7) Scale: $\square = 4 \text{ yd}^2$



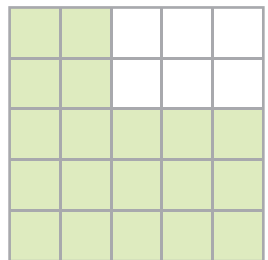
Area = _____

8) Scale: $\square = 9 \text{ in}^2$



Area = _____

9) Scale: $\square = 2 \text{ ft}^2$



Area = _____