
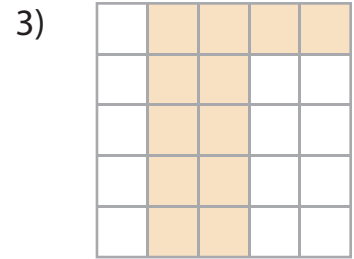
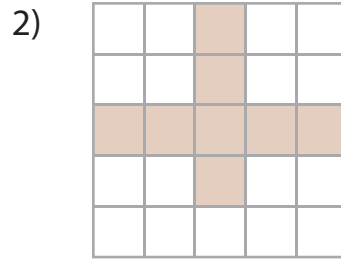
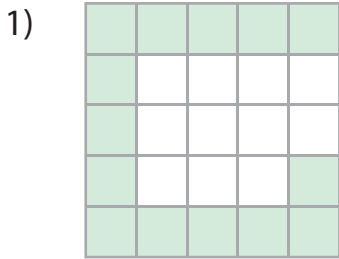


Area of Rectilinear Figures

Find the area of the shaded region in each grid.

 = 1 yd²



Area = _____ yd²

4)

Preview

Become a member to unlock
unrestricted access to both printable
and online worksheets.



www.tutoringhour.com

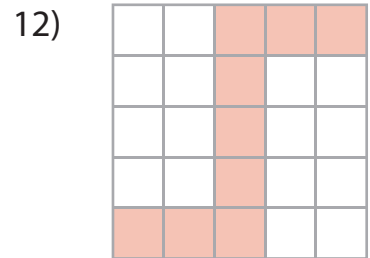
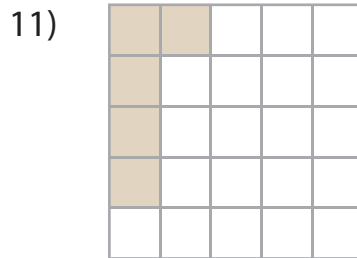
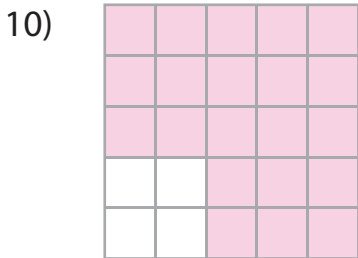
Area = _____ yd²

7)

Area = _____ yd²

Area = _____ yd²

Area = _____ yd²



Area = _____ yd²

Area = _____ yd²

Area = _____ yd²