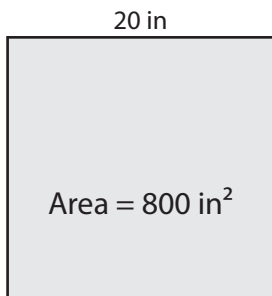


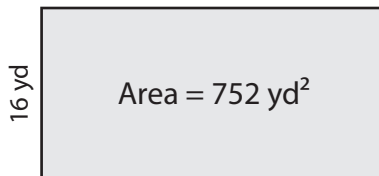
Rectangles | Finding Perimeter from Area

Find the perimeter of each rectangle using the given area.


1)



2)



3)



Perim

Preview

4)

Become a member to unlock
unrestricted access to both printable
and online worksheets.



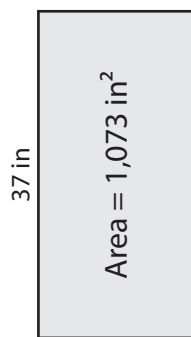
Perim

www.tutoringhour.com

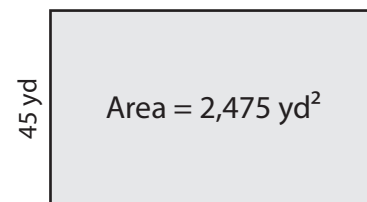
7)



8)



9)



Perimeter = _____

Perimeter = _____

Perimeter = _____