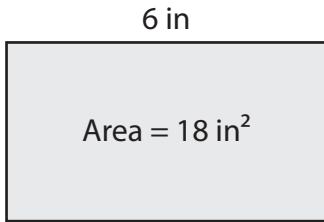


Finding the Length or Width

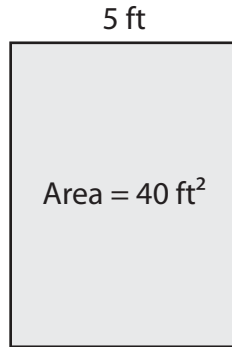
Find the length or width of each rectangle.

1)



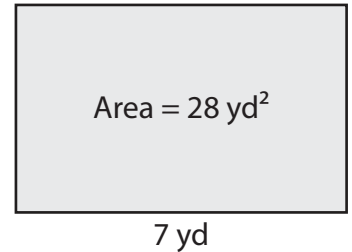
Width = _____

2)



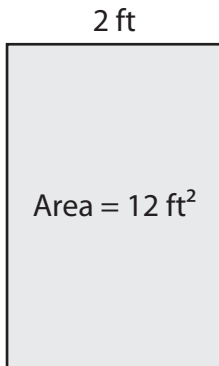
Length = _____

3)



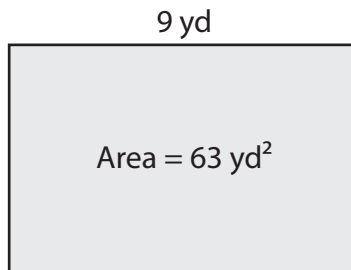
Width = _____

4)



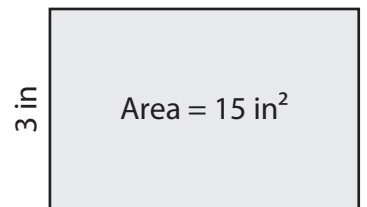
Length = _____

5)



Width = _____

6)



Length = _____

7) The area of a picture frame is 42 square inches. If its length is 7 inches, what is the width of the frame?

