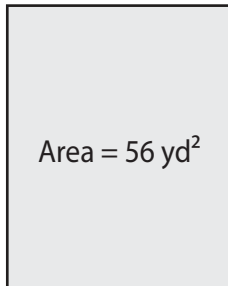


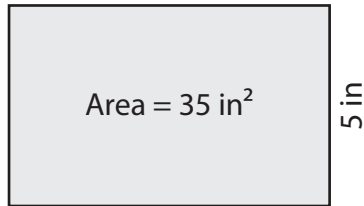
Finding the Length or Width

Find the length or width of each rectangle.

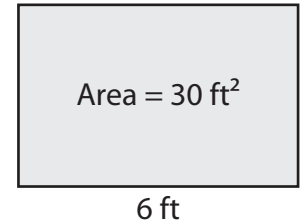
1)



2)



3)



Leng

Preview

4)



Become a member to unlock
unrestricted access to both printable
and online worksheets.



Leng

www.tutoringhour.com

7) An artist's canvas is 3 feet long. How wide is the canvas if its area is 6 square feet?

