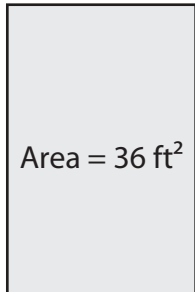


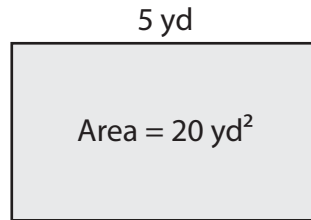
Finding the Length or Width

Find the length or width of each rectangle.

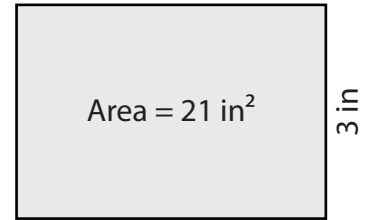
1)



2)



3)



Length

Preview

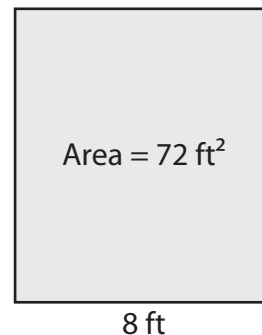
4)

**Become a member to unlock
unrestricted access to both printable
and online worksheets.**

Width

www.tutoringhour.com

- 7) James installed a whiteboard that measures 8 feet in width. If its area is 72 square feet, how long is the whiteboard?



8 ft