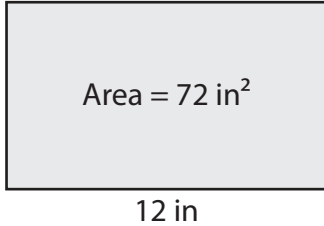


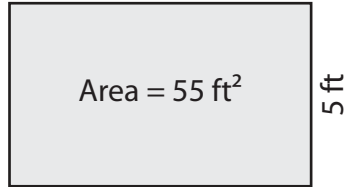
# Finding the Length or Width

Find the length or width of each rectangle.

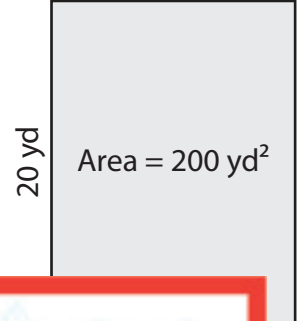
1)



2)



3)



Wid

# Preview

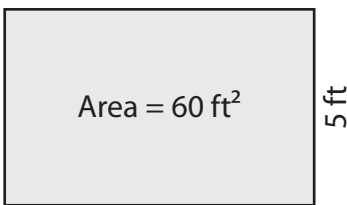
4)

Become a member to unlock  
unrestricted access to both printable  
and online worksheets.

Wid

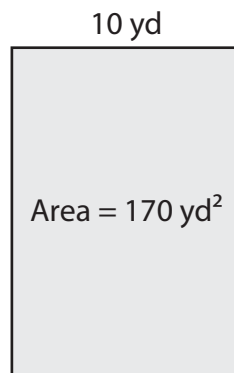
[www.tutoringhour.com](http://www.tutoringhour.com)

7)



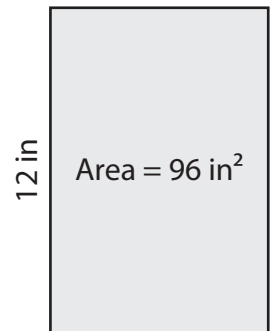
Length = \_\_\_\_\_

8)



Length = \_\_\_\_\_

9)



Width = \_\_\_\_\_