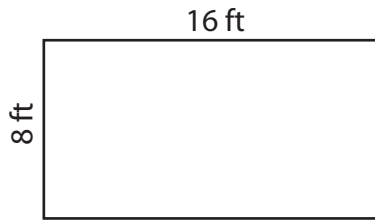


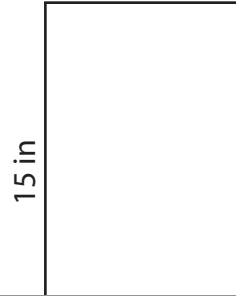
Area of a Rectangle

Find the area of each rectangle.

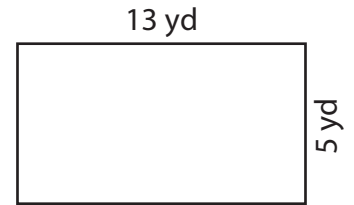
1)



2)



3)



4)

Ar

Preview

Become a member to unlock
unrestricted access to both printable
and online worksheets.

10 in

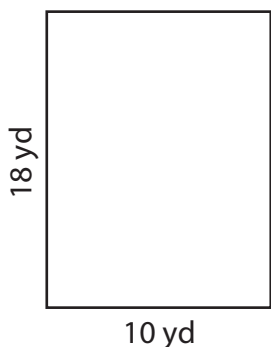
20 ft

Ar

www.tutoringhour.com

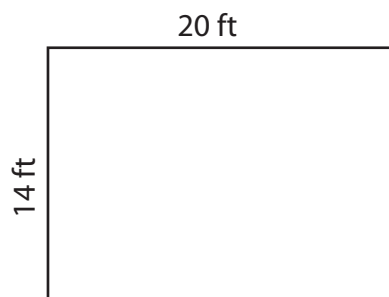


7)




Area = _____

8)



Area = _____

9)



Area = _____