

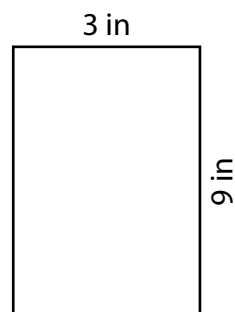
Area of a Rectangle

Find the area of each rectangle.

1)



2)



3)

Preview

Become a member to unlock
unrestricted access to both printable
and online worksheets.

www.tutoringhour.com



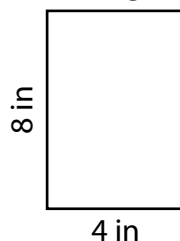
5) A

- 6) Calculate the areas of rectangles A and B, then compare them to determine which one has a larger area.

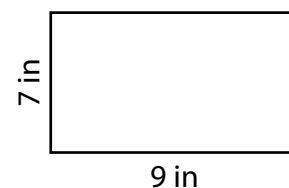
Area of rectangle A = _____

Area of rectangle B = _____

Rectangle A



Rectangle B



Which rectangle has a larger area?

Rectangle A

Rectangle B