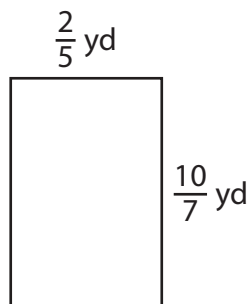


Area of a Rectangle | Fractions

Answer Key

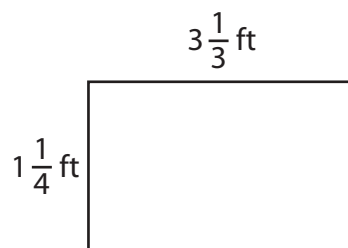
Find the area of each rectangle.

1)




Area = $\frac{4}{7} \text{ yd}^2$

2)



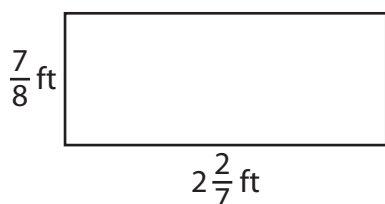
Area = $\frac{25}{6}$ or $4 \frac{1}{6} \text{ ft}^2$

3)



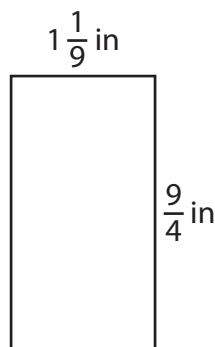
Area = 45 in^2

4)



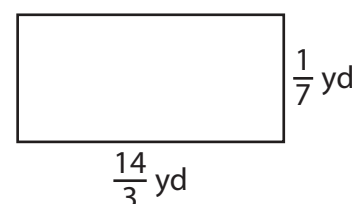
Area = 2 ft^2

5)



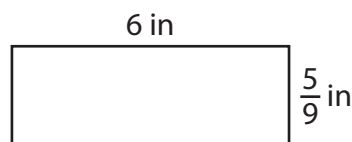
Area = $\frac{5}{2}$ or $2 \frac{1}{2} \text{ in}^2$

6)



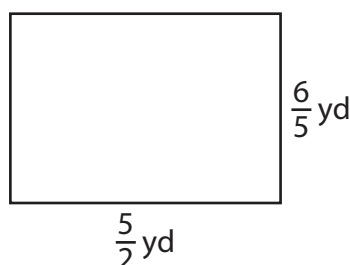
Area = $\frac{2}{3} \text{ yd}^2$

7)



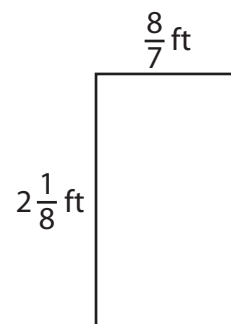
Area = $\frac{10}{3}$ or $3 \frac{1}{3} \text{ in}^2$

8)



Area = 3 yd^2

9)



Area = $\frac{17}{7}$ or $2 \frac{3}{7} \text{ ft}^2$