

Rectangles | Area and Perimeter

Find the area and perimeter of each rectangle.

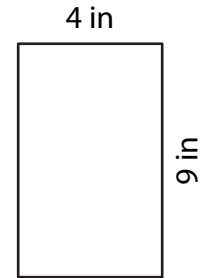
1)



Area = _____

Perimeter = _____

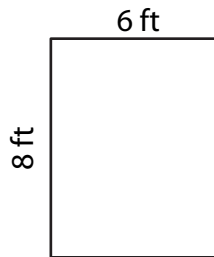
2)



Area = _____

Perimeter = _____

3)



Area = _____

Perimeter = _____

4)



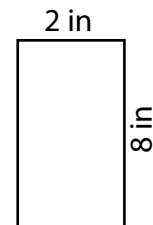
Area = _____

Perimeter = _____

5) A picture frame measures 8 inches in length and 2 inches in width. What is the area and perimeter of the frame?

Area = _____

Perimeter = _____



6) Jack's garden has a rectangular plot with dimensions 7 yards by 4 yards. What is the area and perimeter of his garden?

Area = _____

Perimeter = _____

