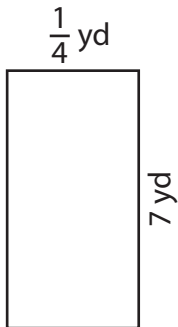


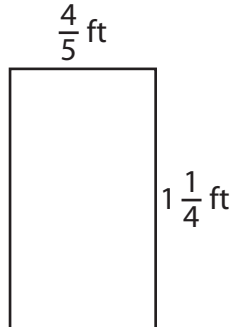
Rectangles | Area and Perimeter

Find the area and perimeter of each rectangle.

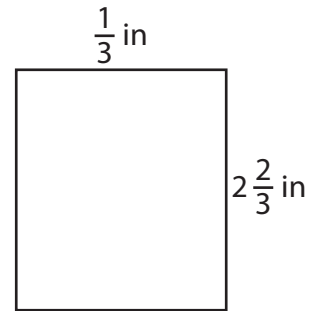
1)



2)



3)



Perim

Preview

4)

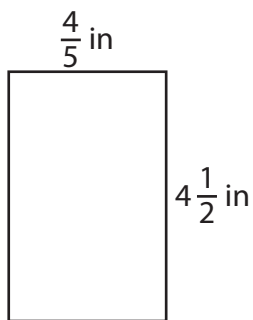
Become a member to unlock
unrestricted access to both printable
and online worksheets.

 $\frac{4}{5}$ yd

Perim

www.tutoringhour.com

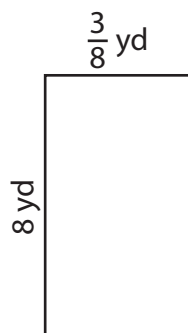
7)



Area = _____

Perimeter = _____

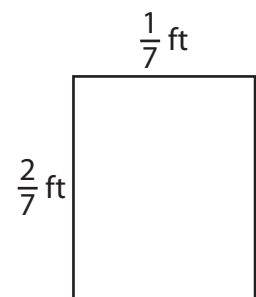
8)



Area = _____

Perimeter = _____

9)



Area = _____

Perimeter = _____