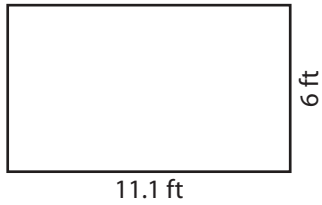



Rectangles | Area and Perimeter

Find the area and perimeter of each rectangle.

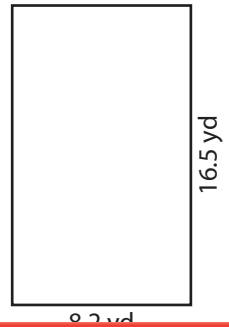
1)



2)



3)



Perim

Preview

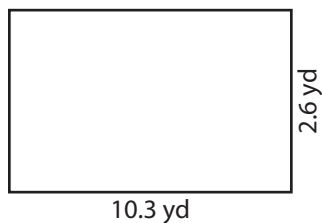
4)

Become a member to unlock
unrestricted access to both printable
and online worksheets.

Perim

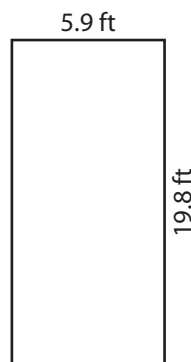
www.tutoringhour.com

7)



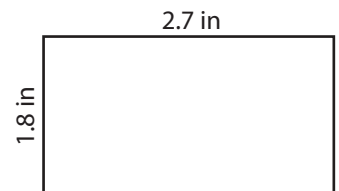
Area = _____

8)



Area = _____

9)



Area = _____

Perimeter = _____

Perimeter = _____

Perimeter = _____