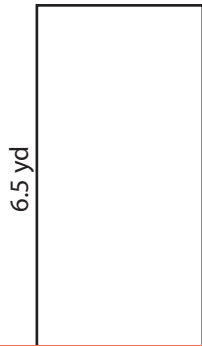


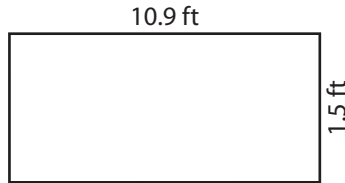
Rectangles | Area and Perimeter

Find the area and perimeter of each rectangle.

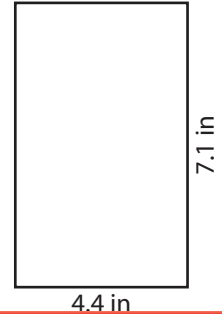
1)



2)



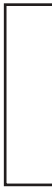
3)



Perim

Preview

4)



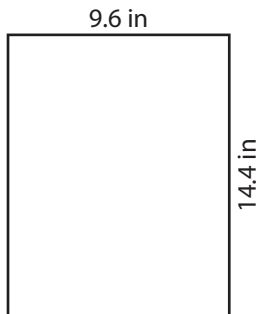
Become a member to unlock
unrestricted access to both printable
and online worksheets.



Perim

www.tutoringhour.com

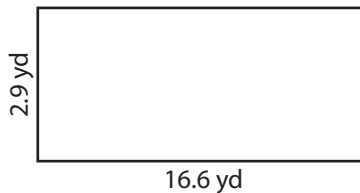
7)



Area = _____

Perimeter = _____

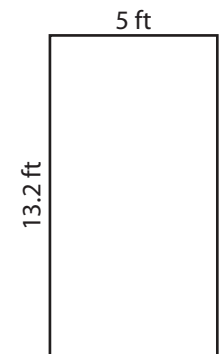
8)



Area = _____

Perimeter = _____

9)



Area = _____

Perimeter = _____