


# Rectangles | Finding Area from Perimeter

Find the area of each rectangle using the given perimeter.

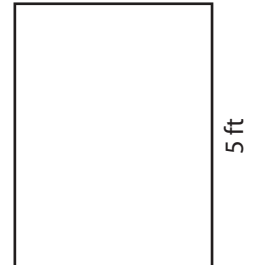
1) Perimeter = 54 in



2) Perimeter = 24 yd



3) Perimeter = 16 ft



W

# Preview

4) Per

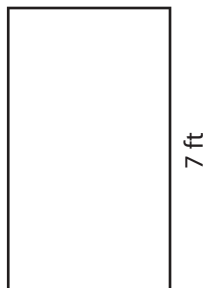
Become a member to unlock  
unrestricted access to both printable  
and online worksheets.



[www.tutoringhour.com](http://www.tutoringhour.com)

Ler

7) Perimeter = 22 ft



8) Perimeter = 62 in



9) Perimeter = 38 yd



Width = \_\_\_\_\_

Length = \_\_\_\_\_

Width = \_\_\_\_\_

Area = \_\_\_\_\_

Area = \_\_\_\_\_

Area = \_\_\_\_\_