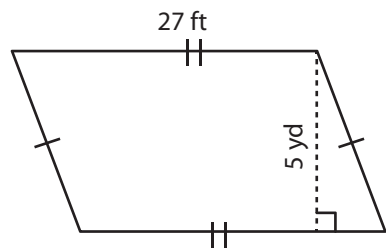


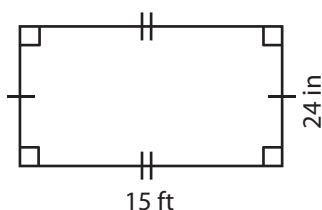
Area of a Quadrilateral

Find the area of each quadrilateral.

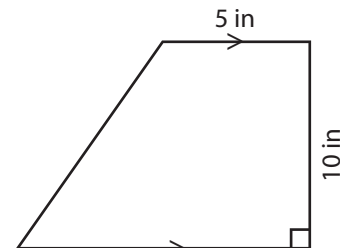
1)



2)



3)



4)

Ar

Preview

in²

Become a member to unlock
unrestricted access to both printable
and online worksheets.

Ar

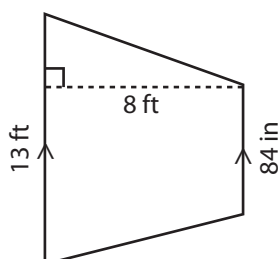
14 ft

ft²

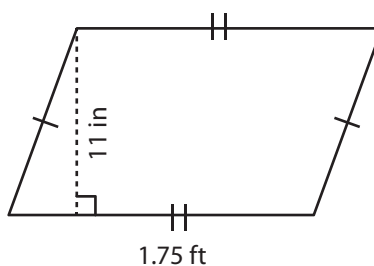
www.tutoringhour.com



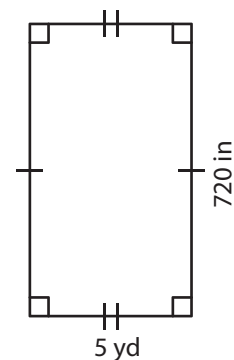
7)



8)



9)



Area = _____ ft²

Area = _____ in²

Area = _____ yd²