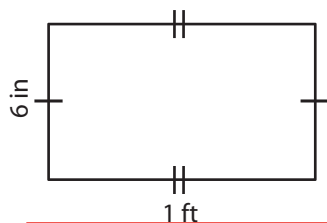


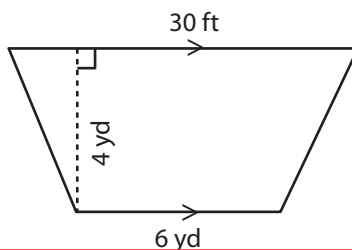
Area of a Quadrilateral

Find the area of each quadrilateral.

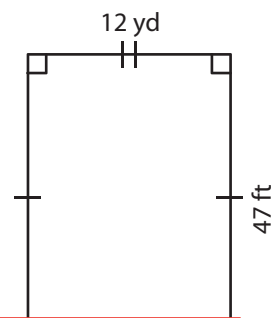
1)



2)



3)



4)

Ar

Preview

Become a member to unlock
unrestricted access to both printable
and online worksheets.



www.tutoringhour.com

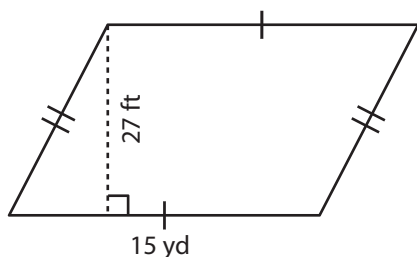
ft²

17 yd

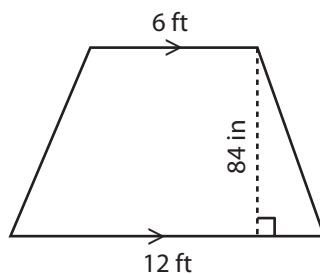
Ar

yd²

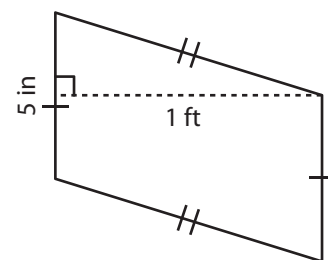
7)



8)



9)



Area = _____ yd²

Area = _____ ft²

Area = _____ in²