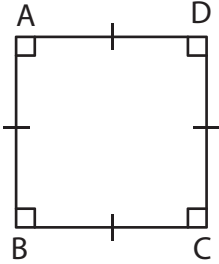


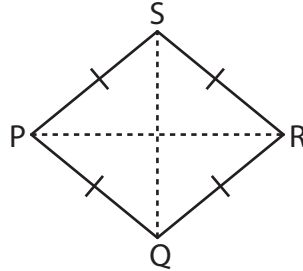
# Area of a Quadrilateral

Find the area of each quadrilateral.

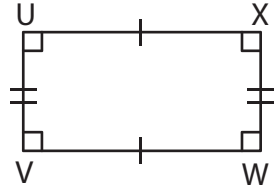
1)



2)



3)



4)

Ar

G

Ar

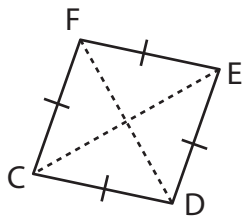
# Preview

Become a member to unlock  
unrestricted access to both printable  
and online worksheets.



www.tutoringhour.com

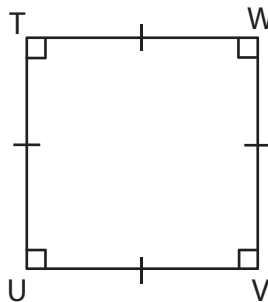
7)



$CE = 14$  ft,  $DF = 12$  ft

Area = \_\_\_\_\_

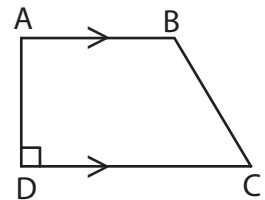
8)



$TU = 10$  yd

Area = \_\_\_\_\_

9)



$DA = 7$  in,  $AB = 8$  in,  
 $CD = 12$  in

Area = \_\_\_\_\_